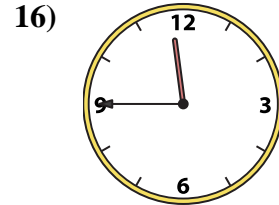
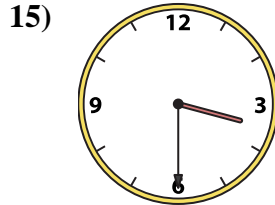
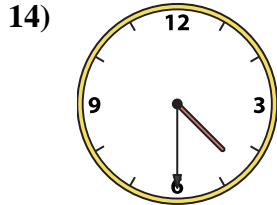
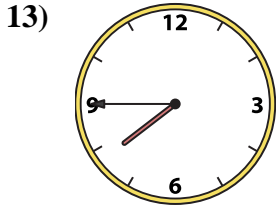
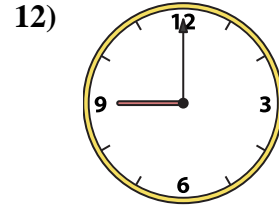
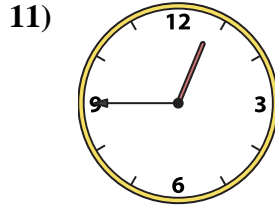
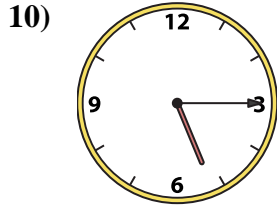
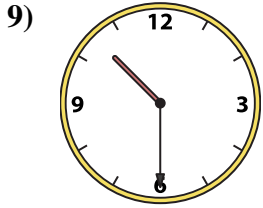
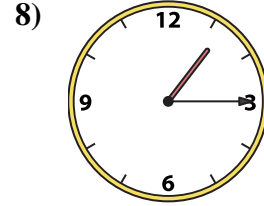
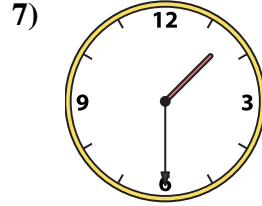
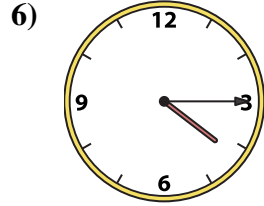
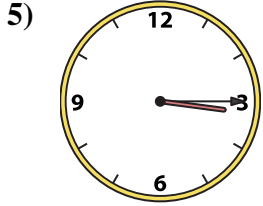
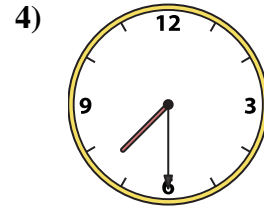
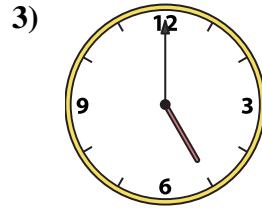
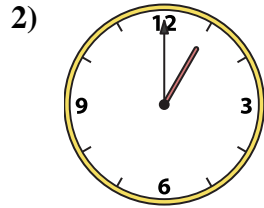
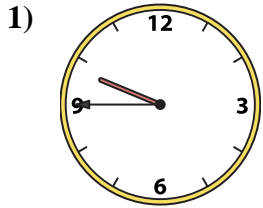




Match the analog clock to the digital clock.

Answers



A. 11:45

B. 10:30

C. 1:00

D. 7:45

E. 5:00

F. 4:30

G. 4:15

H. 5:15

I. 3:15

J. 3:30

K. 9:00

L. 7:30

M. 1:30

N. 9:45

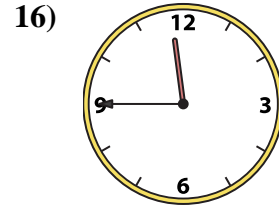
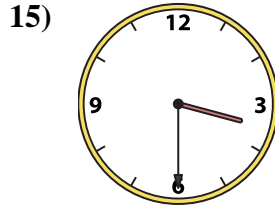
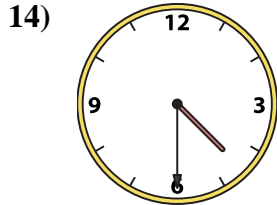
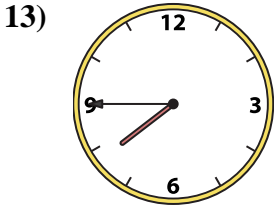
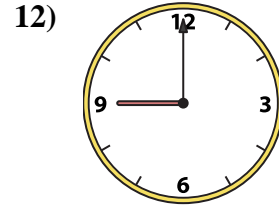
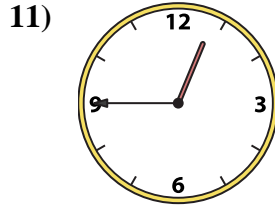
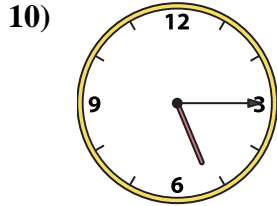
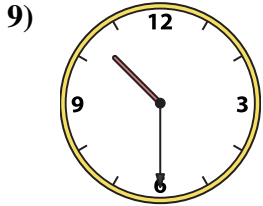
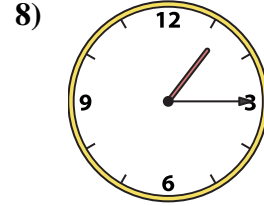
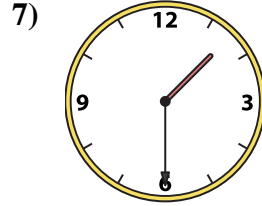
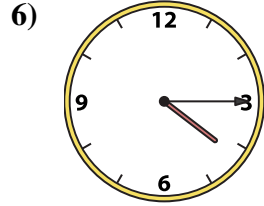
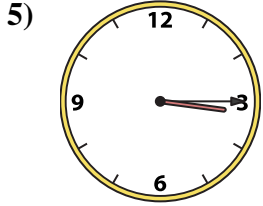
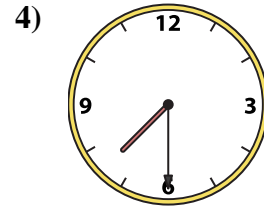
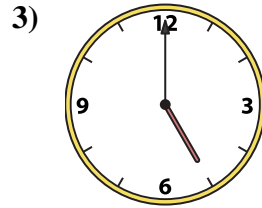
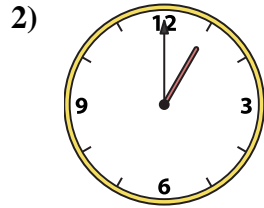
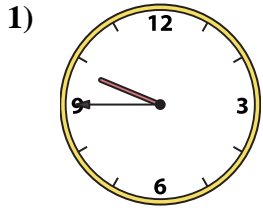
O. 1:15

P. 12:45

1. _____
2. _____
3. _____
4. _____
5. _____
6. _____
7. _____
8. _____
9. _____
10. _____
11. _____
12. _____
13. _____
14. _____
15. _____
16. _____



Match the analog clock to the digital clock.



A. **11:45**

B. **10:30**

C. **1:00**

D. **7:45**

E. **5:00**

F. **4:30**

G. **4:15**

H. **5:15**

I. **3:15**

J. **3:30**

K. **9:00**

L. **7:30**

M. **1:30**

N. **9:45**

O. **1:15**

P. **12:45**

Answers

1. **N**

2. **C**

3. **E**

4. **L**

5. **I**

6. **G**

7. **M**

8. **O**

9. **B**

10. **H**

11. **P**

12. **K**

13. **D**

14. **F**

15. **J**

16. **A**